
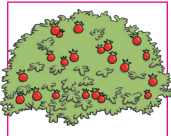

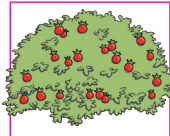





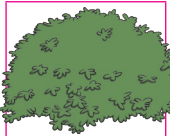

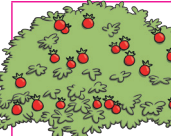
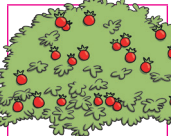




Counting in 5s Mazes

Help the rabbit find the path through the mazes to the carrots by counting on in fives from zero.

	0	5	10	20	45	5	10
	30		15		15		25
40	10	50	20	25	30	5	15
	15		35		35	40	

	10	15		20	45	5	10
0		50	10	5		30	
5	25	50	25	30	35	50	0
10	15		35	40	45	50	45
5	20	25	30		40		30

Challenge

Complete this sequence.

0 5 15 20 30 40 45

Counting in 5s Mazes Answers

Maze 1: A rabbit starts at 0. The path of numbers is 0, 30, 40, 10, 50, 20, 25, 30, 5, 15, 35, 40, ending at carrots.

Maze 2: A rabbit starts at 0. The path of numbers is 0, 5, 10, 15, 20, 30, 35, 40, 45, 50, 5, 10, ending at carrots.

Challenge

Complete this sequence.

0 5 **10** 15 20 **25** 30 **35** 40 45 **50**